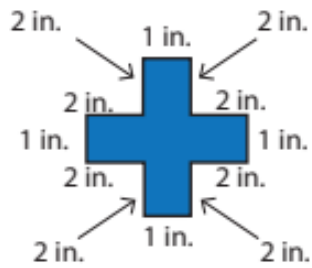


4.



Find the perimeter of the given polygon.

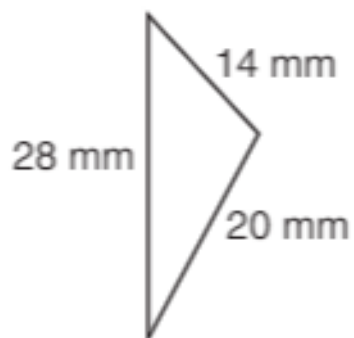
a) 24 in

b) 20 in

c) 18 in

d) 22 in

5.



Find the perimeter of the given polygon.

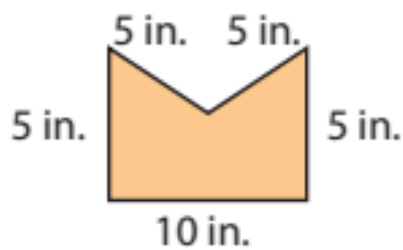
a) 62 m

b) 64 mm

c) 60 m

d) 62 mm

6.



Find the perimeter of the given polygon.

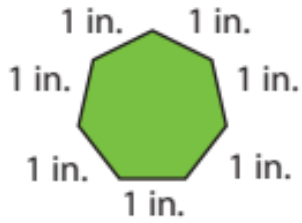
a) 30 m

b) 30 in

c) 30 ft

d) 30 mm

7.



Find the perimeter of the given polygon.

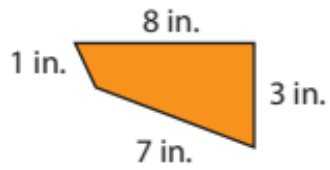
a) 10 in

b) 6 in

c) 7 in

d) 8 in

8.



Find the perimeter of the given polygon.

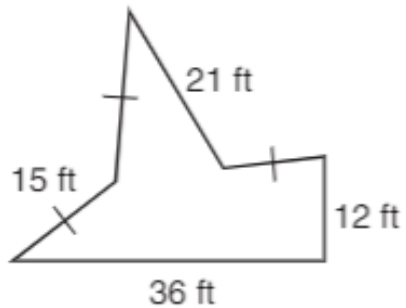
a) 19 gnus

b) 19 ni

c) 19 in

d) 18 in

9.



Find the perimeter of the given polygon.

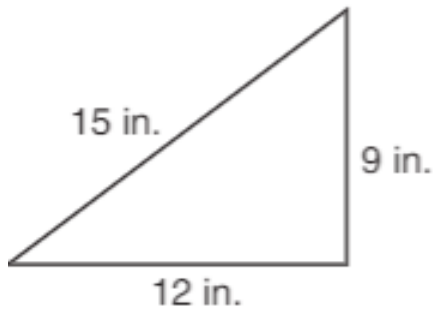
a) 84 ft

b) 114 ft

c) 99 ft

d) 141 ft

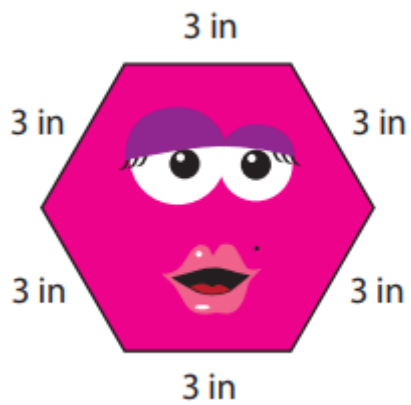
13.



Find the perimeter of the given polygon.

- a) 21
b) 36 in
c) 24 in
d) 36

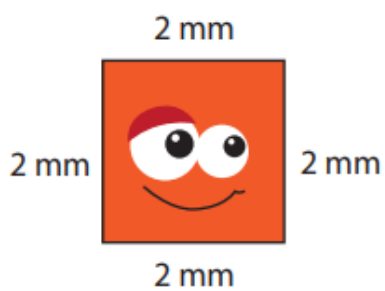
14.



Find the perimeter of the given polygon.

- a) 18 mm
b) 15 in
c) 18 m
d) 18 in

15.



Find the perimeter of the given polygon.

- a) 8 mm
b) 8 m
c) 8 mi
d) 8 in

